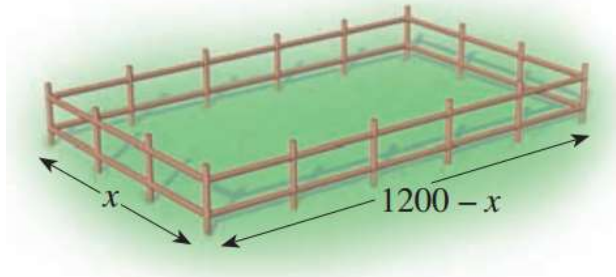


3.1 Recitation Exercises

1. The sum of the real coefficients a , b and c of the quadratic function $f(x) = ax^2 + bx + c$ that has **only one** x -intercept at -2 and y -intercept at 8 is
 A) 2 B) 16 C) 18 D) 8 E) -21
2. If -3 is a zero of the quadratic function $f(x) = ax^2 + bx + c$ and its graph has lowest point $(-2, -2)$. What is the other zero of this quadratic function?
3. If a ball is thrown up in the air and its height H , in meters, is a function of time t , in seconds, given by $H(t) = -16t^2 + 128t + 105$, then the time it will take the ball to reach its maximum height is
 A) 4 seconds B) 8 seconds C) 2 seconds D) 1 second E) 16 seconds
4. If $x = -3$ is the axis of symmetry of the parabola $f(x) = -2x^2 - 4dx - d^2 - 7$ for some constant d , then the maximum value of $f(x)$ is equal to
 A) 3 B) 1 C) -3 D) no maximum value E) 2
5. If u and v are two integers such that $v - 2u = 8$ and the product uv is minimum, then find $u + v$.
6. Carol has 2400 ft of fencing to fence in a rectangular horse corral.
 - (a) Find a function that models the area of the corral in terms of the width x of the corral.
 - (b) Find the dimensions of the rectangle that maximize the area of the corral.

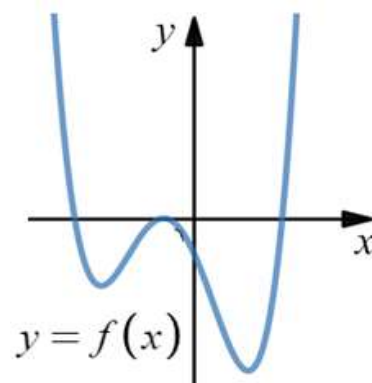


the

3.2 Recitation Exercises

1. If $f(x) = a(x + 4)(x^2 + 2x + 1)(3 - x)$ has the graph below then a reasonable possible value of the leading coefficient a that will justify the end behavior (far left and far right behavior) of the graph is

- A) -1
- B) 2
- C) 0
- D) 1
- E) $\frac{1}{2}$

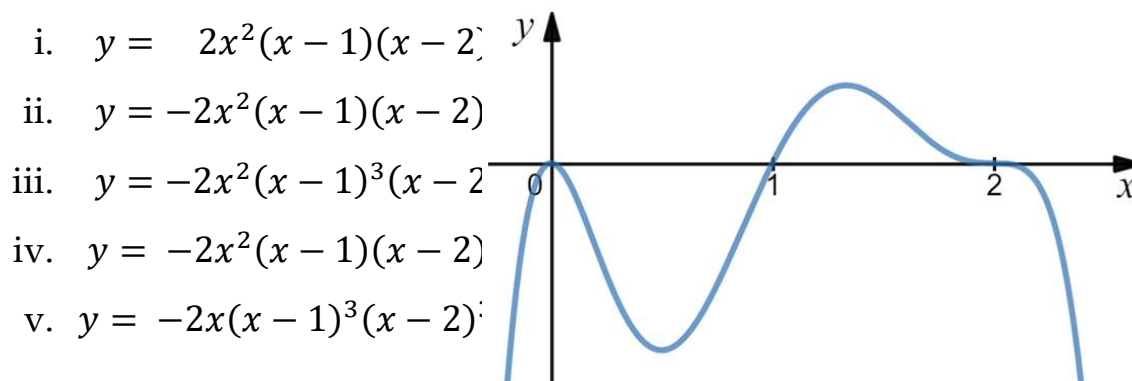


2. Sketch the graph of the following polynomials

a) $P(x) = x^4 - x^3 - 2x^2$.

b) $Q(x) = |x^4 - x^3 - 2x^2|$.

3. Which one of the following polynomials has the graph given below?



- i. $y = 2x^2(x - 1)(x - 2)$
- ii. $y = -2x^2(x - 1)(x - 2)$
- iii. $y = -2x^2(x - 1)^3(x - 2)$
- iv. $y = -2x^2(x - 1)(x - 2)$
- v. $y = -2x(x - 1)^3(x - 2)$

4. Graph the polynomial $p(x) = x^3(x + 2)(x - 3)^2$ and find the interval(s) on which the function is below x -axis.

3.3 Recitation Exercises

1. When $x^3 - 3x^2 - x - 1$ is divided by $x - k$, and the remainder is -4 , then the sum of all values of k is
 A) 3 B) 1 C) -1 D) 0 E) 2

2. If $P(x) = x^{105} - x^{10} - 2x + 1$ is divided by $x + 1$, then the remainder is
 A) 2 B) 1 C) -1 D) 0 E) -2

3. If $x + 2$ is a factor of the polynomial $P(x) = x^3 - kx^2 + 3x + 7k$, then $k =$
 A) $\frac{10}{3}$ B) $\frac{13}{3}$ C) $\frac{11}{3}$ D) $\frac{16}{3}$ E) $\frac{14}{3}$

4. If $P(x) = -x^3 + kx^2 - 5x - 20$ is divided by $x + 2$, then the set of all values of k which makes the remainder positive is
 A) $\left(\frac{9}{2}, \infty\right)$ B) $\left(\frac{19}{2}, \infty\right)$ C) $\left(\frac{11}{2}, \infty\right)$ D) $\left(\frac{1}{2}, \infty\right)$ E) \emptyset

5. If $\frac{2x^5 + x^3 - 2x^2 + 3x - 5}{x^2 - 3x + 1} = Q(x) + \frac{R(x)}{x^2 - 3x + 1}$, then what are $Q(x)$ and $R(x)$?

3.4 Recitation Exercises

1. According to Descartes rule of signs, which one of the following is **FALSE** about the zeros of the polynomial $P(x) = x^5 - x^4 + 2x^2 - x - 1$? $P(x)$ has
 - A) three negative zeros and two non-real complex zeros.
 - B) three positive zeros and two negative zeros.
 - C) three positive zeros and two non-real complex zeros.
 - D) one positive zero, two negative zeros, and two non-real complex zeros.
 - E) one positive zero and four non-real complex zeros.

2. Find all rational zeros of $P(x) = x^3 - 7x^2 + 16x - 12$ and write it in factored form.

3. The sum of all real zeros of the polynomial $P(x) = 2x^4 + 15x^3 + 17x^2 + 3x - 1$ is
 - A) $-3 + \sqrt{10}$
 - B) $-\frac{3}{2}$
 - C) $-\frac{15}{2}$
 - D) $-3 - \sqrt{10}$
 - E) -7

4. The total number of the x -intercept(s) of the graph of the polynomial $P(x) = x^5 + 6x^4 + 13x^3 + 14x^2 + 12x + 8$ is
 - A) 0
 - B) 1
 - C) 2
 - D) 3
 - E) 4

5. Sketch the graph of the polynomial $P(x) = 2x^3 - 7x^2 + 2x + 3$.

6. List all **possible rational zeros** given by the Rational Zeros Theorem, for the polynomial $P(x) = 12x^5 + 6x^3 - 2x - 8$.

3.5 Recitation Exercises

1. If $-i$ is a zero of the polynomial $P(x) = x^4 - 4x^3 + 5x^2 - 4x + 4$, then the number of the x -intercept(s) of the graph of P is
A) 0 B) 1 C) 2 D) 3 E) 4

2. If $1 + i$ is a zero of $P(x) = x^3 - x^2 - ix^2 - 16x + 16 + 16i$, then find the **sum of all zeros** of $P(x)$
A) 0 B) $1 + i$ C) $1 - i$ D) 4 E) -4

3. Find all the zeros of the polynomial $P(x) = x^5 + x^3 + 8x^2 + 8$.

4. Find the polynomial of least degree for which $1 + i$ and $-1 - i$ are zeros and the y -intercept is -2 where the polynomial has:

a) Real coefficients.

b) Complex coefficients.

3.6 Recitation Exercises

1. If $y = \frac{2}{3}$ is the horizontal asymptote of the function $y = \frac{ax-}{3x-4}$, then the x -intercept of the graph is

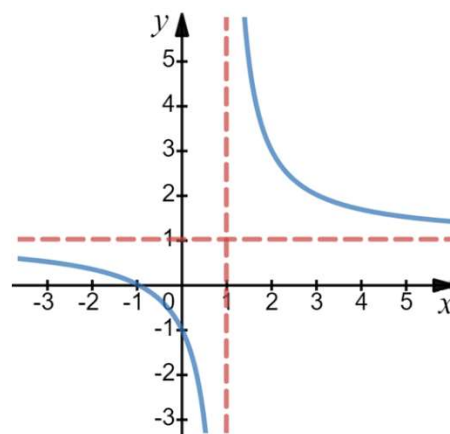
A) $\frac{4}{3}$ B) $\frac{5}{2}$ C) $\frac{5}{4}$ D) $\frac{3}{2}$ E) $-\frac{1}{2}$

2. The graph of $y = \frac{x^2+3x-2}{2x^2+x+10}$ intersects its horizontal asymptote when x equals

A) $\frac{14}{3}$ B) $-\frac{1}{2}$ C) $\frac{11}{5}$ D) $-\frac{2}{3}$ E) $\frac{14}{5}$

3. The following figure represents the graph of

A) $y = \frac{x}{x-1}$
 B) $y = \frac{x+1}{x-1}$
 C) $y = \frac{x-1}{x+1}$
 D) $y = \frac{2(x+1)}{x-1}$
 E) $y = \frac{x+2}{x-1}$



4. The graph of $y = \frac{6-ax}{5-(a-2)x}$ has vertical asymptote $x = 5$, then it has a horizontal asymptote given by

A) $y = \frac{1}{3}$ B) $y = \frac{3}{2}$ C) $y = 5$ D) $y = \frac{6}{5}$ E) $y = 3$

5. Find all the asymptotes and holes, if any, for the graph of $f(x) = \frac{x^4-4x^2}{x^3-2x^2-4x+8}$.